



CBGS SCHEME

USN

--	--	--	--	--	--	--	--	--	--

15CS33

Third Semester B.E. Degree Examination, Dec.2018/Jan.2019

Data Structures and Applications

Time: 3 hrs.

Max. Marks: 80

Note: Answer any FIVE full questions, choosing one full question from each module.

Module-1

- 1 a. Write a C program with an appropriate structure definition and variable declaration to read and display information about an employee, using nested structures. Consider the following fields like Ename, Eid, DOJ(Date, Month, Year) and Salary (Basic, DA, HRA). (06 Marks)
- b. Consider 2 polynomials $A(x) = 2x^{1000} + 1$ and $B(x) = x^4 + 10x^3 + 3x^2 + 1$, show how these polynomials are stored in the 1-D array also give its C representation. (04 Marks)
- c. Write a C function to add 2 polynomials A and B store the result in polynomial C. (06 Marks)

OR

- 2 a. Consider the pattern ababab, construct the table and the corresponding labeled directed graph used in the second pattern matching algorithm. (06 Marks)
- b. Write transpose algorithm to transpose the given sparse matrix, express the given sparse

matrix as triplets and find its transpose

15	0	0	22	0	-5
0	10	2	0	0	0
0	0	0	-4	0	0
0	0	0	0	0	0
91	0	0	0	0	0
0	0	28	0	0	0

(10 Marks)

Module-2

- 3 a. Implement push and POP functions for stack with stack full (using dynamic arrays) and stack empty conditions. (06 Marks)
- b. Define recursion, write a function for tower of hanoi. (06 Marks)
- c. Write a note on Dequeues and Priority Queues. (04 Marks)

OR

- 4 a. Write a 'C' function to insert and delete an item into a circular queue. Explain how it is advantageous over linear Queue. (06 Marks)
- b. Convert the following infix expression to postfix form, (i) $a + (b + c) + (b/d) * a + z * u$ (04 Marks)
- (ii) $A - B / C(C * D * E)$
- c. Write a 'C' function to evaluate the postfix expression and trace the given postfix expression using stack $623 + -382 / + * 2 \$ 3 +$ (06 Marks)

Module-3

- 5 a. Write 'C' function to perform the following:
 - (i) To insert a node at front end of the single linked list.
 - (ii) To delete a node at rear end of S.L.L.
 - (iii) To create an ordered S.L.L
 - (iv) To concatenate 2 S.L.L. (12 Marks)
- b. What are the advantages of double linked list over single linked list? Explain with an example. (04 Marks)

Important Note : 1. On completing your answers, compulsorily draw diagonal cross lines on the remaining blank pages.
2. Any revealing of identification, appeal to evaluator and /or equations written eg. 42+8 = 50, will be treated as malpractice.



15CS33

OR

- 6 a. Write a C function to perform the following operations on double linked list:
- (i) Inserting a node at the beginning.
 - (ii) Deleting a node at the rear end
 - (iii) Inserting an item at a specified position.
- (09 Marks)
- b. Write a C function to add 2 polynomials represented as circular list with header nodes.
- (07 Marks)

Module-4

- 7 a. Define tree, for the tree given below define the following terminologies:
- (i) Degree
 - (ii) Non Terminals and terminals nodes.
 - (iii) Siblings
 - (iv) Ancestors
 - (v) Level
 - (vi) Height or depth

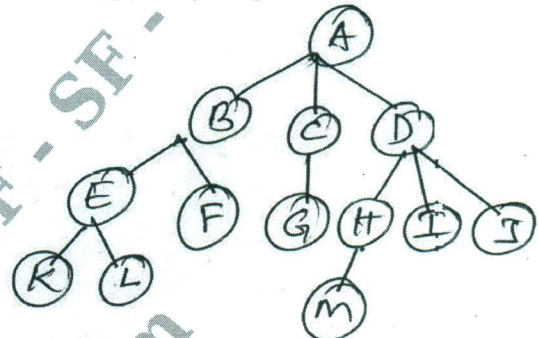


Fig. Q7 (a)

- b. Explain Binary tree using Array representation and linked representation, which representation is more suitable and why?
- (05 Marks)
- (06 Marks)
- c. Write a note on threaded binary trees and write the rules to construct the threads.
- (05 Marks)

OR

- 8 a. Define binary search tree, write a function for recursive or iterative search for BST.
- (06 Marks)
- b. For the given data draw a binary search tree 1, 3, 8, 5, 7, 9, 10, 12, 15, 14, 13, 11, 6
- (04 Marks)
- c. For a tree given below traverse the tree using inorder, preorder, postorder, traversals, write the C routines for any traversal.
- (06 Marks)

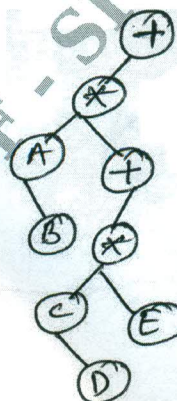



Fig. Q8 (c)

Module-5

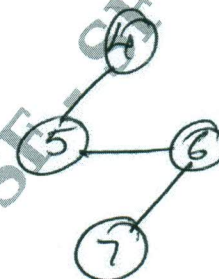
- 9 a. Define Graph, for the given graph G show adjacency matrix and adjacency list representation of the graph.

Graph with 2 components

H₁



H₂



(08 Marks)

- b. What are the methods used for traversing a graph, explain any one with example and write the function for the same. (08 Marks)

OR

- 10 a. Sort the following list of numbers using Radix sort:
45, 37, 05, 09, 06, 11, 18, 27

(04 Marks)

- b. What are the types of file organization? Explain any two. (08 Marks)
- c. Explain binary files, how are they different from text files. (04 Marks)

* * * * *